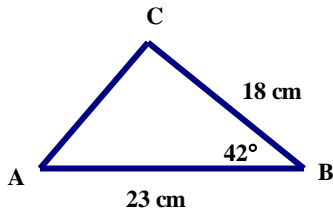


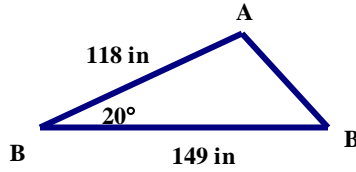
The Area of a Triangle Practice

Find the area (A) of each triangle. Show all work! Round your answers to the nearest tenth.

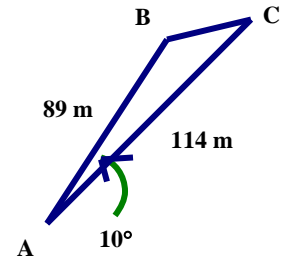
1. $K \approx$ _____



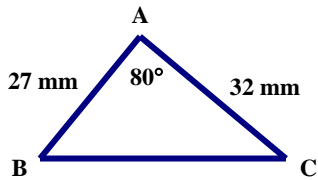
2. $K \approx$ _____



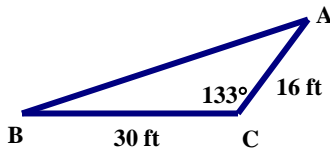
3. $K \approx$ _____



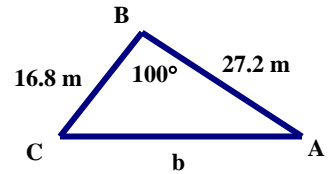
4. $K \approx$ _____



5. $K \approx$ _____

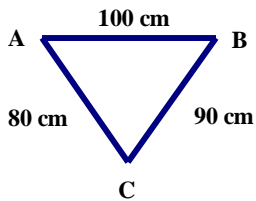


6. $K \approx$ _____

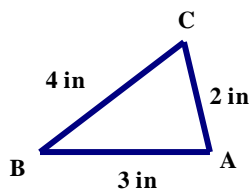


Use Heron's Formula to find the area (K) of each triangle. Show all work! Round your answers to the nearest tenth.

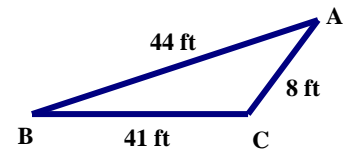
7. $K \approx$ _____



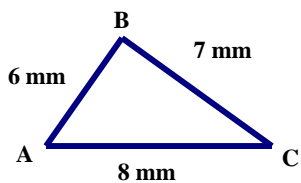
8. $K \approx$ _____



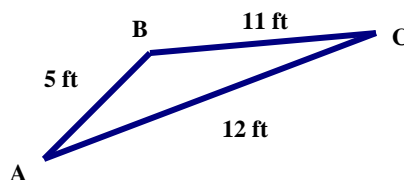
9. $K \approx$ _____



10. $K \approx$ _____



11. $K \approx$ _____



12. $K \approx$ _____

